


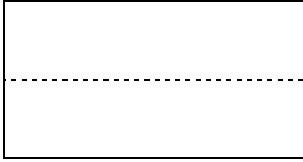
Math Mondays
October 13, 2025
Fall Pumpkins

Kindergarten – 2nd Grade:

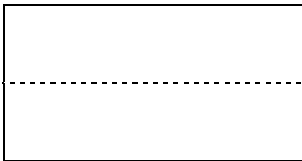
Ask your students to color the image. Then use the image to answer each question



1. How many pumpkins are there altogether both in the wagon and on the ground?



2. 4 large pumpkins fit in 1 wagon. How many pumpkins fit in 3 wagons?



3. It takes one person 20 minutes to carve one jack-o-lantern. How many minutes would it take for 2 people to carve all the pumpkins in the image? Use words and numbers to support your answer.
