


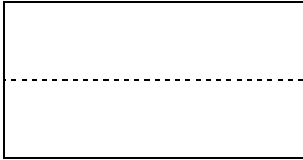
**Math Mondays! August 25, 2025**  
**National Banana Split Day**

**Kindergarten – 2<sup>nd</sup> Grade:**

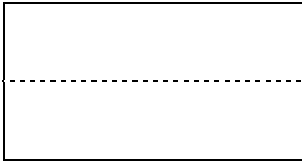
Ask your students to color the image. Then use the image to answer each question



1. Each banana split needs 3 scoops of ice cream. How many scoops are needed to make 2 banana splits?



2. The ice cream parlor uses  $\frac{1}{2}$  of a banana for each banana split. How many banana splits can be made using only 3 bananas?



3. Each banana split has 3 scoops of ice cream. How many scoops of ice cream is needed for everyone in your class to have a banana split? Use words and numbers to support your answer.

---

---

---